

(60 points possible)

Study Test B

(48 points on p.1)

(12 points on p.2)

1. Write the music alphabet backwards starting with G. (6 points)

G _____

2. Identify these intervals such as 2nds, 3rds, and repeats. (8 points)



3. Write the 5 finger patterns starting on these keys: (16 points)

G Major G _____

G Minor G _____

C Major C _____

C Minor C _____

4. Give the letter name of these notes: (10 points)


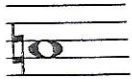


5. Give the letter name of these notes: (8 points)



Study Test B - page 2

6. Match the music symbols:



Time Signature

Staccato

Bass Clef

Slur

Treble clef

Quarter Rest

Sharp



Natural Sign

Flat

Octave Sign

Half Rest

Bar Line



_____ points on p. 2 (12 points possible)